



Determine which letter best represents the sum.

1) $\frac{9}{10} + \frac{7}{10}$

3) $\frac{1}{10} + \frac{4}{10}$

5) $\frac{5}{6} + \frac{1}{6}$

7) $\frac{3}{6} + \frac{1}{6}$

9) $\frac{5}{12} + \frac{9}{12}$

11) $\frac{2}{4} + \frac{2}{4}$

13) $\frac{4}{6} + \frac{4}{6}$

2) $\frac{1}{2} + \frac{1}{2}$

4) $\frac{7}{8} + \frac{7}{8}$

6) $\frac{6}{10} + \frac{6}{10}$

8) $\frac{1}{10} + \frac{6}{10}$

10) $\frac{1}{3} + \frac{1}{3}$

12) $\frac{8}{12} + \frac{11}{12}$

14) $\frac{9}{10} + \frac{4}{10}$

Answers

1. _____

2. _____

3. _____

4. _____

5. _____

6. _____

7. _____

8. _____

9. _____

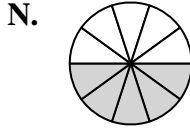
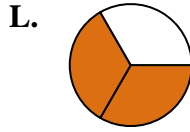
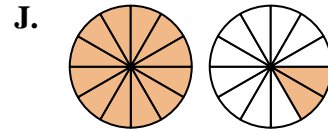
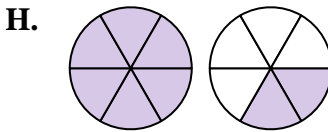
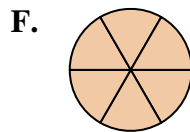
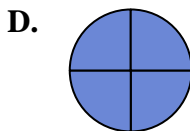
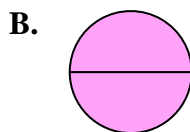
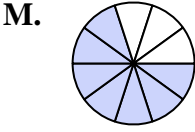
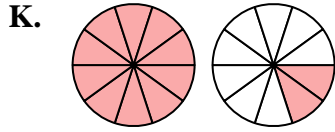
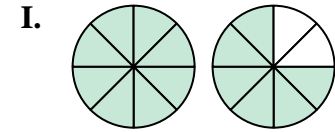
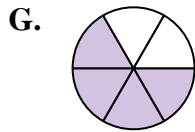
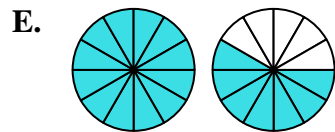
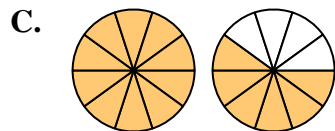
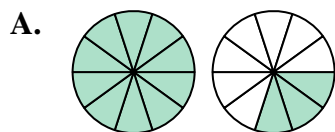
10. _____

11. _____

12. _____

13. _____

14. _____





Determine which letter best represents the sum.

1) $\frac{9}{10} + \frac{7}{10}$

3) $\frac{1}{10} + \frac{4}{10}$

5) $\frac{5}{6} + \frac{1}{6}$

7) $\frac{3}{6} + \frac{1}{6}$

9) $\frac{5}{12} + \frac{9}{12}$

11) $\frac{2}{4} + \frac{2}{4}$

13) $\frac{4}{6} + \frac{4}{6}$

2) $\frac{1}{2} + \frac{1}{2}$

4) $\frac{7}{8} + \frac{7}{8}$

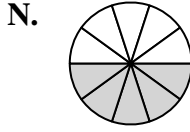
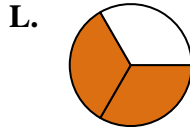
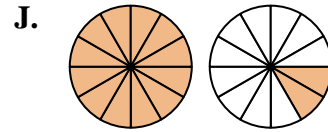
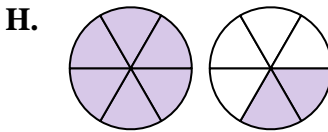
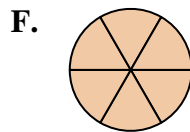
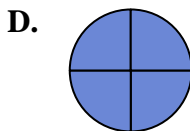
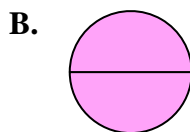
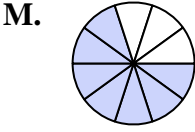
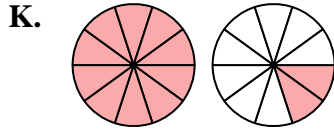
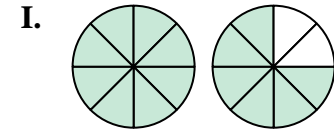
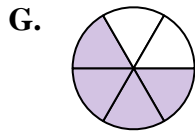
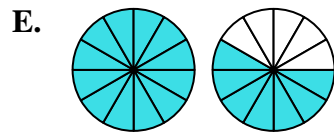
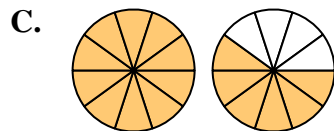
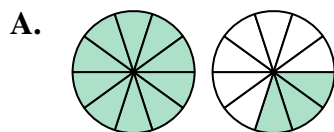
6) $\frac{6}{10} + \frac{6}{10}$

8) $\frac{1}{10} + \frac{6}{10}$

10) $\frac{1}{3} + \frac{1}{3}$

12) $\frac{8}{12} + \frac{11}{12}$

14) $\frac{9}{10} + \frac{4}{10}$



Answers

1. **C** $1\frac{6}{10}$

2. **B** $\frac{2}{2}$

3. **N** $\frac{5}{10}$

4. **I** $1\frac{6}{8}$

5. **F** $\frac{6}{6}$

6. **K** $1\frac{2}{10}$

7. **G** $\frac{4}{6}$

8. **M** $\frac{7}{10}$

9. **J** $1\frac{2}{12}$

10. **L** $\frac{2}{3}$

11. **D** $\frac{4}{4}$

12. **E** $1\frac{7}{12}$

13. **H** $1\frac{2}{6}$

14. **A** $1\frac{3}{10}$